

TECH 1521
Graphics and Descriptive Geometry

Homework Packet 2

Name: _____

Date: _____

Grade Sheet – Packet 2

Sheet 12 _____

Sheet 13 _____

Sheet 14 _____

Sheet 15 _____

Sheet 16 _____


Average _____ (Before Adjustment)

Adjustment _____ (Neatness, Organization, Completeness)

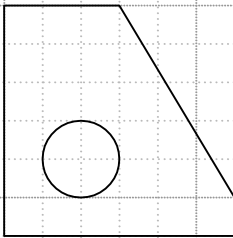

Final Grade _____

12.1 - 12.3 Finish the incomplete views.


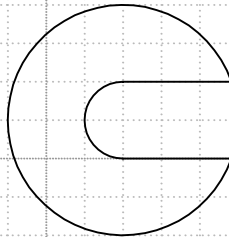
12.1



12.2



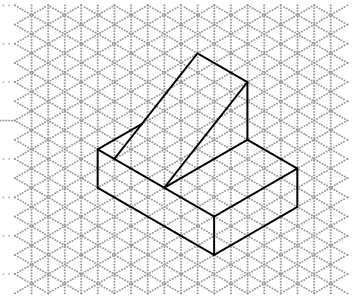
12.2



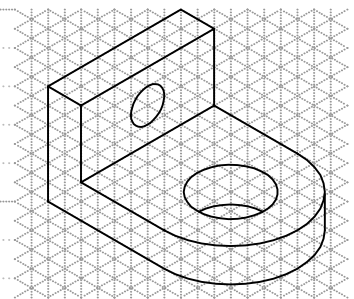
SHEET 012
GRADE _____

13.1 - 13.2 Construct the front, top and right side views of each part.
Apply centerlines where necessary.

13.1



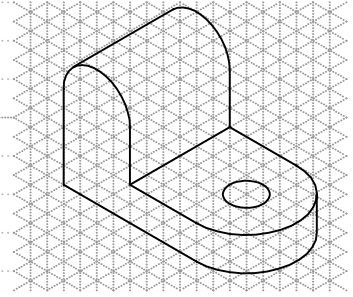
13.2




SHEET 013
GRADE _____

14.1 - 14.2 Construct the front, top and right side views of each part.
Apply centerlines where necessary.

14.1

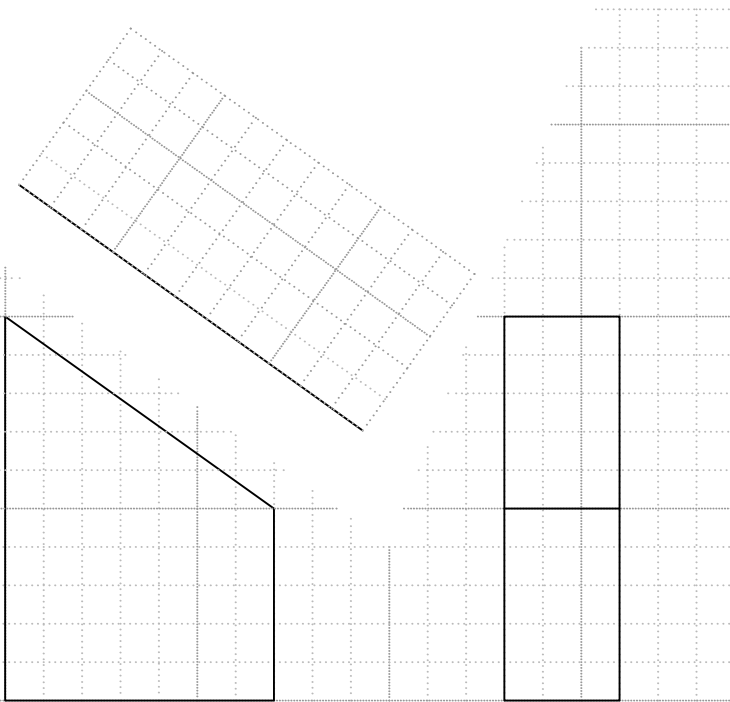


14.2

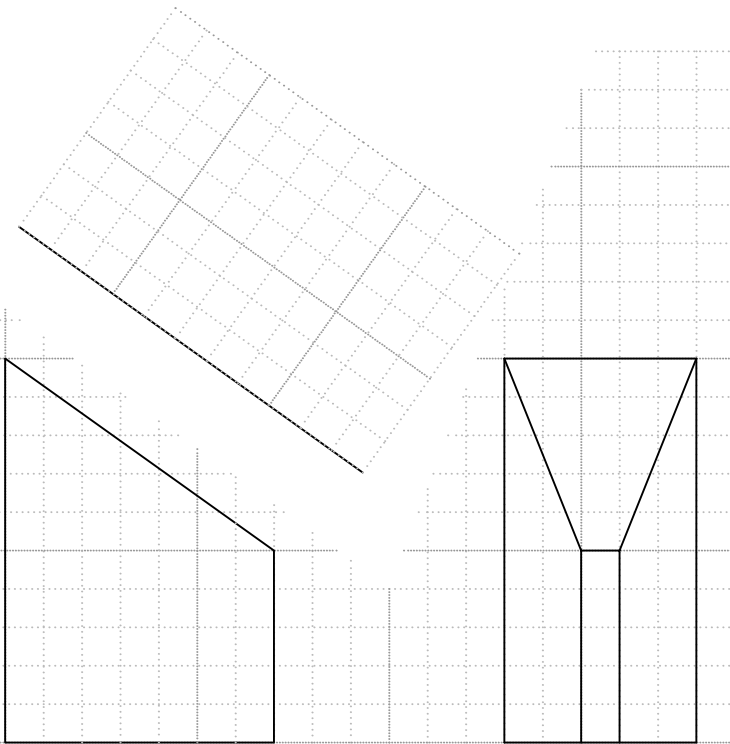


15.1 - 15.2 Construct an auxiliary view of each figure.

15.1




15.2



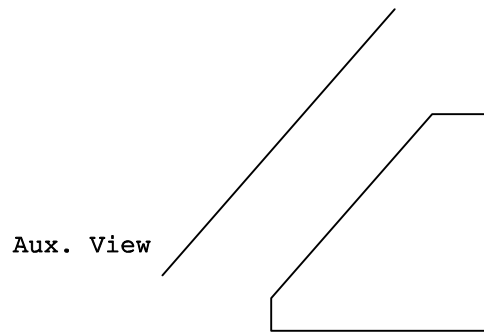
SHEET 015
GRADE _____

16.1 - 16.2 Construct an auxiliary view of each figure.

16.1

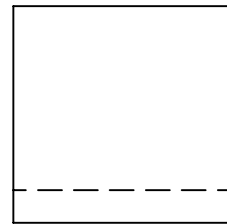


Top View



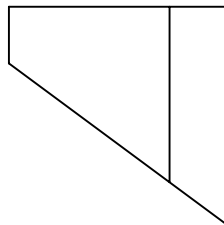
Aux. View

Front View

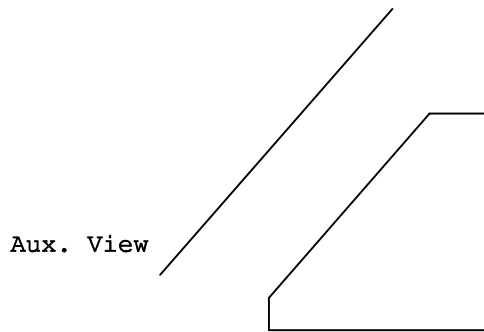


Right Side View

16.2

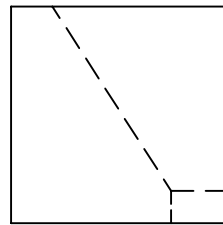


Top View



Aux. View

Front View



Right Side View

SHEET 016
GRADE _____